
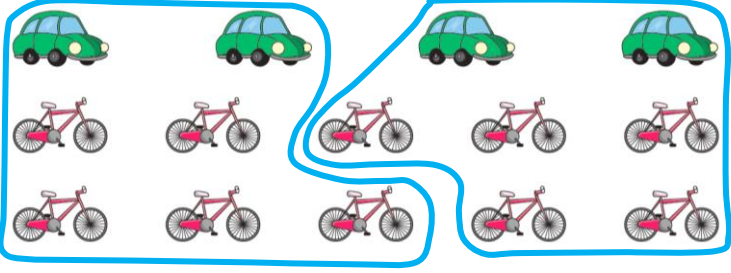



Question	Answer
1	For every 3 sheep, there are 6 cows. For every 2 cows, there is 1 sheep.
2	a)  b) 
3	For every 6 squares, there are 3 circles. For every 6 squares, there are 9 triangles. For every 1 square, there is $\frac{1}{2}$ a circle.
4	a) A child 's tower with 3 green cubes for every 1 red cube. b) The towers will both have 3 green cubes for every 1 red cube. The order and total number of cubes may be different.
5	multiple possible answers, e.g. 
6	multiple possible answers, e.g. For every 6 red cubes, there are 2 yellow cubes. For every 4 yellow cubes, there are 12 red cubes. For every 1 yellow cube, there are 3 red cubes.
7	a) She has written lollipops and cookies the wrong way round. b) multiple possible answers, e.g. For every 3 cookies, there are 2 lollipops.
8	Child's drawing of at least 15 red fish and 5 goldfish, with 3 times as many red fish as gold fish.
9	6